

ESERCIZI IN PIÙ

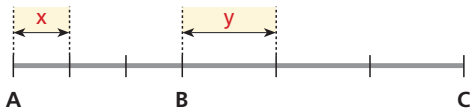
DALLE IMMAGINI ALLE ESPRESSIONI

Per ognuna delle figure seguenti scrivi l'espressione relativa alla misura di ciò che è indicato.

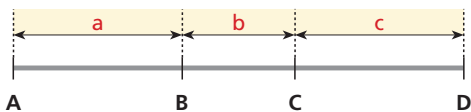
- 1** Lunghezza del segmento AB .



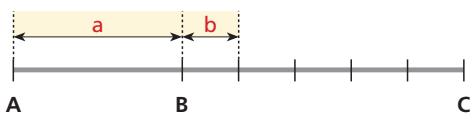
- 2** Lunghezza del segmento AC .



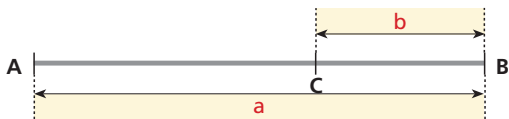
- 3** Lunghezza del segmento AD .



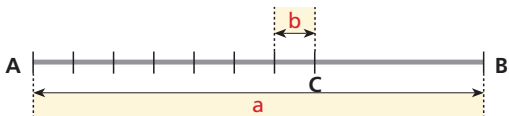
- 4** Lunghezza del segmento AC .



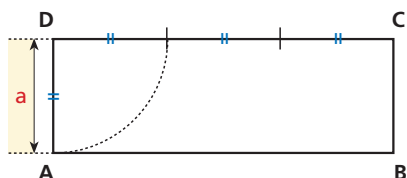
- 5** Lunghezza del segmento AC .



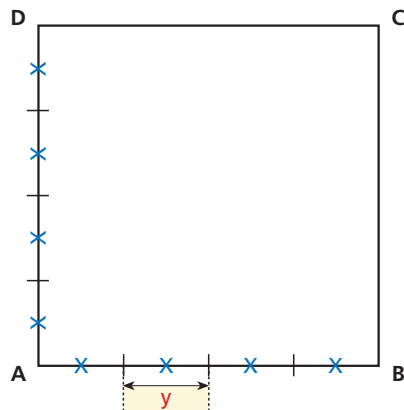
- 6** Lunghezza del segmento CB .



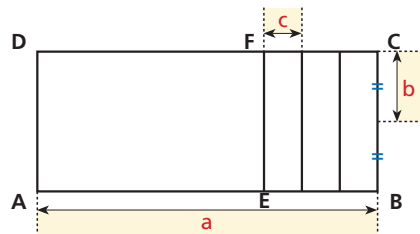
- 7** Area del rettangolo $ABCD$.



- 8** Area del quadrato $ABCD$.



- 9** Area del rettangolo $Aefd$.



- 10** Area del:
- quadrato $Aefg$;
 - quadrato $IFHC$;
 - rettangolo $EDHF$.

