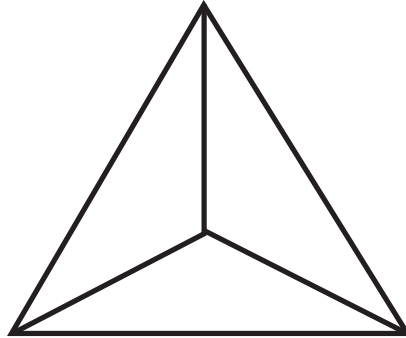



FRAZIONI

Questo triangolo è diviso in **tre parti** uguali.



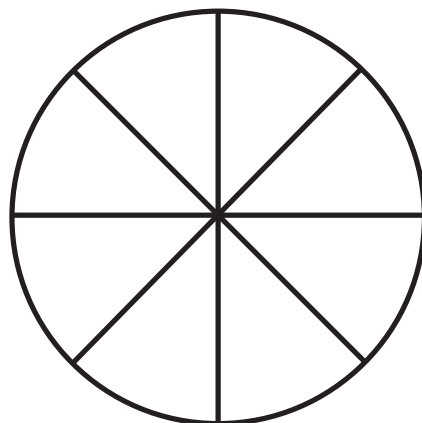
Colora **due parti**. Hai rappresentato la frazione $\frac{2}{3}$.

Questo rettangolo è diviso in **otto parti** uguali.



Colora **cinque parti**. Hai rappresentato la frazione.....

Questo cerchio è diviso in **otto parti** uguali.




Colora **tre parti**. Hai rappresentato la frazione.....

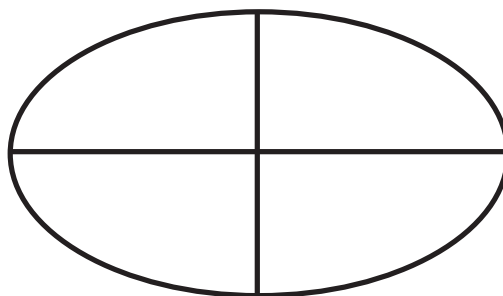
FRAZIONI

Colora ogni figura come indica la frazione.


$$\frac{1}{5} =$$



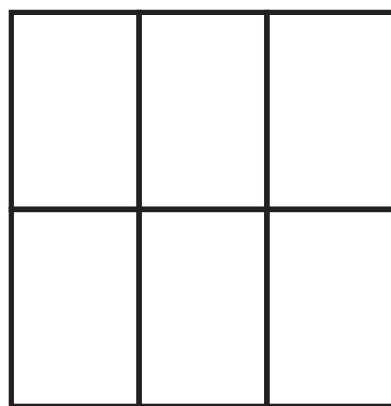
$$\frac{4}{4} =$$




$$\frac{1}{3} =$$



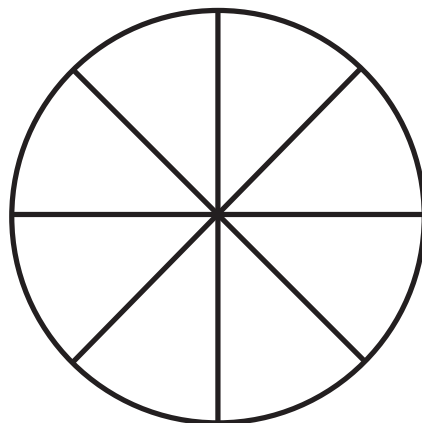
$$\frac{3}{6} =$$



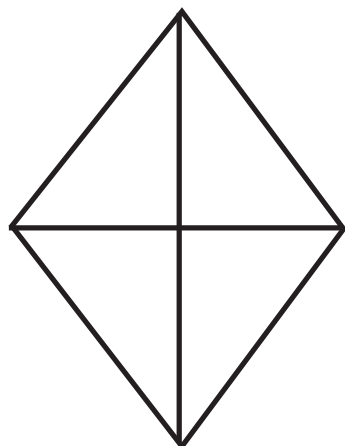
$$\frac{4}{7} =$$



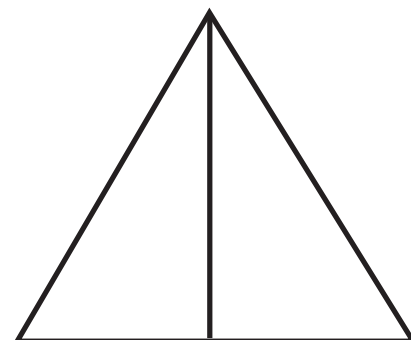
$$\frac{2}{8} =$$



$$\frac{3}{4} =$$





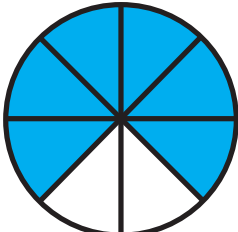




$$\frac{1}{2} =$$



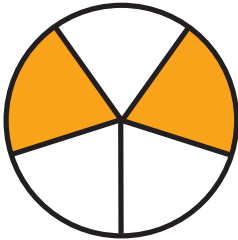
FRAZIONI

Indica la frazione che è rappresentata dal disegno come nell'esempio.


	$\frac{1}{2}$	$\frac{3}{8}$	$\frac{7}{8}$	$\frac{1}{8}$	$\frac{6}{5}$
	$\frac{1}{4}$	$\frac{3}{4}$	$\frac{7}{8}$	$\frac{1}{8}$	$\frac{1}{5}$
	$\frac{1}{2}$	$\frac{3}{8}$	$\frac{1}{6}$	$\frac{1}{7}$	$\frac{6}{8}$
	$\frac{1}{3}$	$\frac{3}{6}$	$\frac{1}{2}$	$\frac{1}{5}$	$\frac{1}{4}$
	$\frac{6}{8}$	$\frac{5}{8}$	$\frac{4}{5}$	$\frac{1}{8}$	$\frac{2}{5}$
	$\frac{1}{3}$	$\frac{3}{4}$	$\frac{1}{2}$	$\frac{1}{5}$	$\frac{2}{1}$
	$\frac{1}{2}$	$\frac{3}{4}$	$\frac{5}{6}$	$\frac{1}{4}$	$\frac{4}{3}$

FRAZIONI


Completa scrivendo la frazione corrispondente al disegno



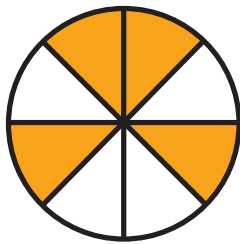
—



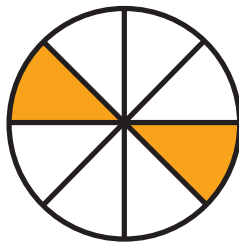
—



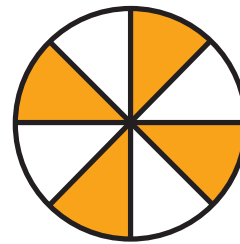
—




—



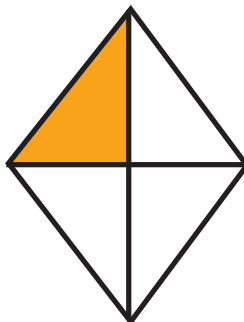
—



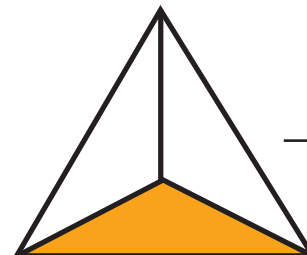
—



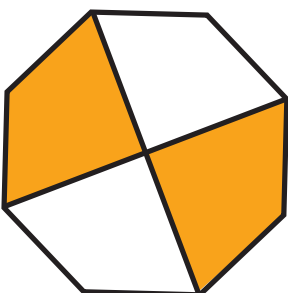
—



—



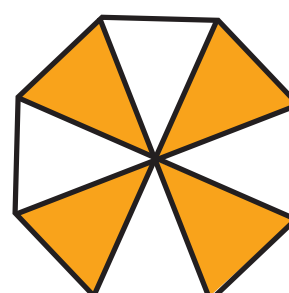
—



—



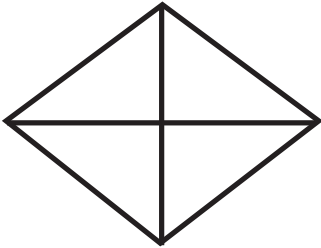
—




—

FRAZIONI

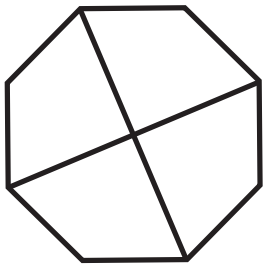
Colora come indicato dalle frazioni.



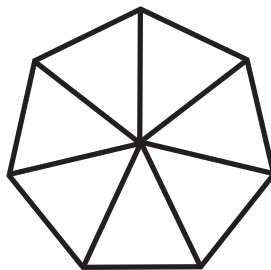
$$\frac{3}{4}$$




$$\frac{2}{4}$$




$$\frac{1}{4}$$




$$\frac{1}{7}$$




$$\frac{4}{6}$$



$$\frac{1}{8}$$




$$\frac{1}{10}$$




$$\frac{6}{10}$$

FRAZIONI


Colora come indicato dalle frazioni.




$$\frac{1}{5}$$



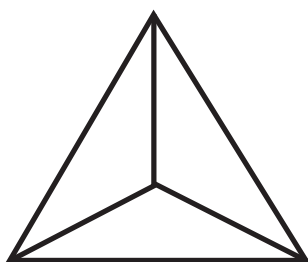
$$\frac{3}{5}$$



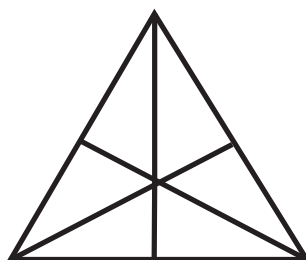
$$\frac{5}{8}$$



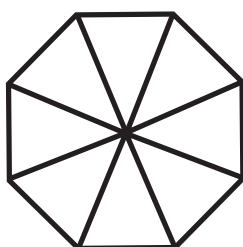
$$\frac{4}{10}$$



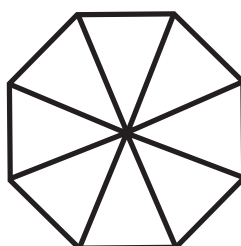
$$\frac{1}{3}$$



$$\frac{2}{6}$$



$$\frac{4}{8}$$



$$\frac{6}{8}$$