

FRAZIONI DECIMALI



Divido questo rettangolo in dieci parti.



Ogni quadratino è $\frac{1}{10}$ del rettangolo



colora $\frac{1}{10}$ del rettangolo



colora $\frac{2}{10}$ del rettangolo



colora $\frac{3}{10}$ del rettangolo



colora $\frac{4}{10}$ del rettangolo



colora $\frac{5}{10}$ del rettangolo



colora $\frac{6}{10}$ del rettangolo



colora $\frac{7}{10}$ del rettangolo



colora $\frac{8}{10}$ del rettangolo




colora $\frac{9}{10}$ del rettangolo




colora $\frac{10}{10}$ del rettangolo


FRAZIONI DECIMALI



Divido questo quadrato in 100 parti.




Ogni quadratino è $\frac{1}{100}$ del quadrato.

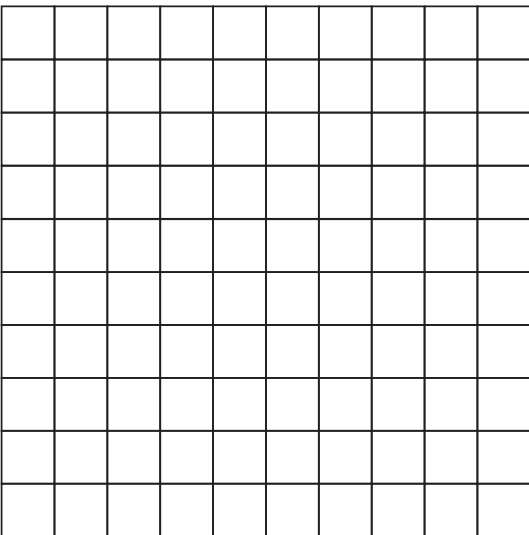


Colora i $\frac{5}{100}$ del quadrato.


FRAZIONI DECIMALI



Colora i $\frac{12}{100}$ del quadrato.




Colora i $\frac{15}{100}$ del quadrato.

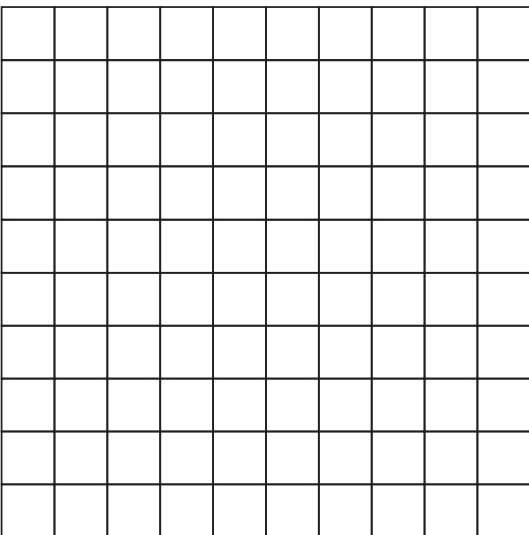


Colora i $\frac{25}{100}$ del quadrato.


FRAZIONI DECIMALI



Colora i $\frac{40}{100}$ del quadrato.



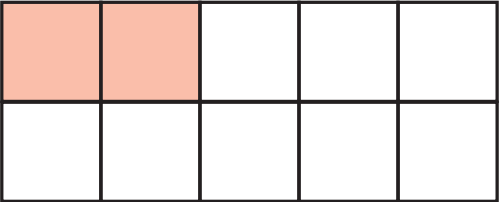
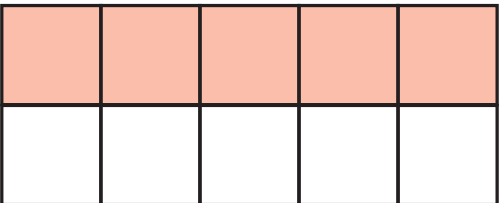
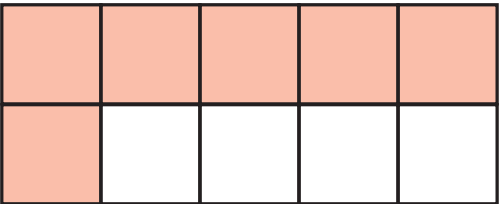
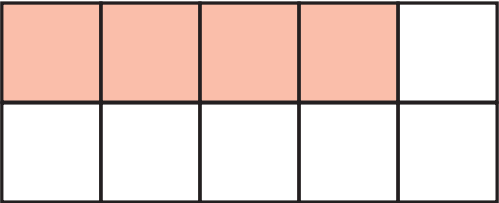
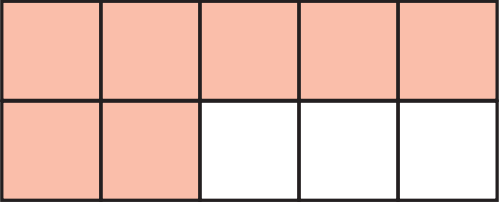


Colora i $\frac{50}{100}$ del quadrato.



Colora i $\frac{75}{100}$ del quadrato.

FRAZIONI DECIMALI


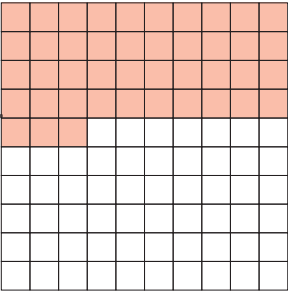



Le frazioni con denominatore 10 rappresentano numeri con una cifra decimale. *Completa la tabella.*

	Frazione decimale	Numero decimale
	$\frac{2}{10}$	0,2
		
		
		
		
		
		

Controlla con la calcolatrice se hai risposto correttamente.

FRAZIONI DECIMALI


Le frazioni con denominatore 100 rappresentano numeri con due cifre decimale. *Completa la tabella.*

	Frazione decimale	Numero decimale
	$\frac{80}{100}$	0,80
		
		
		
		


Verifica con la calcolatrice se hai trovato il numero decimale corretto.

FRAZIONI DECIMALI


Colora le frazioni indicate.




$$\frac{2}{10}$$




$$\frac{6}{10}$$




$$\frac{7}{10}$$




$$\frac{9}{10}$$




$$\frac{5}{100}$$



$$\frac{23}{100}$$



$$\frac{60}{100}$$



$$\frac{89}{100}$$

Completa il passaggio della frazione decimale al numero decimale.

$$\frac{2}{10} = 0,2$$

$$\frac{6}{10} = \dots\dots\dots$$

$$\frac{7}{10} = \dots\dots\dots$$

$$\frac{9}{10} = \dots\dots\dots$$

$$\frac{5}{100} = \dots\dots\dots$$

$$\frac{23}{100} = \dots\dots\dots$$

$$\frac{60}{100} = \dots\dots\dots$$

$$\frac{89}{100} = \dots\dots\dots$$

Completa il passaggio dal numero decimale alla frazione decimale.

$$1,2 = \frac{12}{10} \dots\dots\dots$$

$$3,7 = \dots\dots\dots$$

$$6,5 = \dots\dots\dots$$

$$2,12 = \dots\dots\dots$$

$$5,61 = \dots\dots\dots$$

$$1,38 = \dots\dots\dots$$