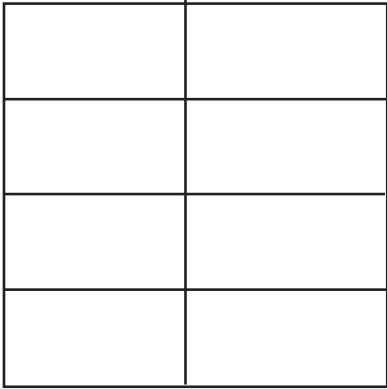



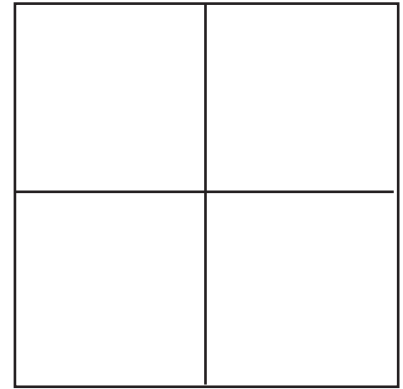
ANCORA FRAZIONI

Colora nelle figure geometriche la parte corrispondente alla frazione indicata.



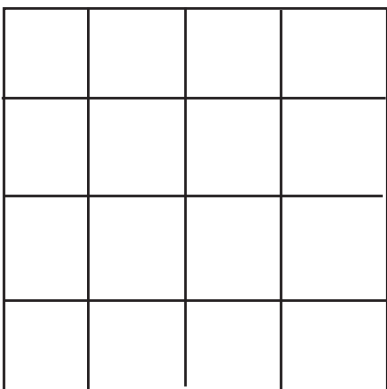
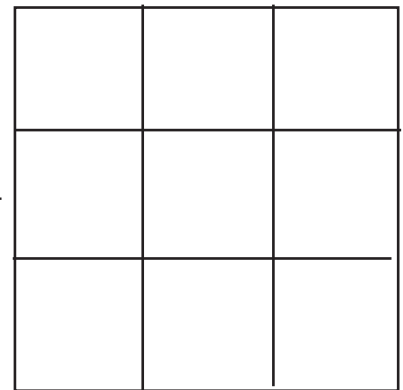
colora $\frac{6}{8}$

colora $\frac{2}{4}$



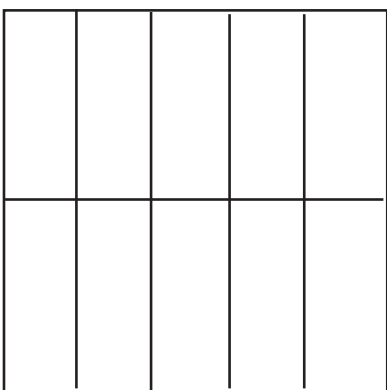

colora $\frac{1}{2}$

colora $\frac{3}{9}$



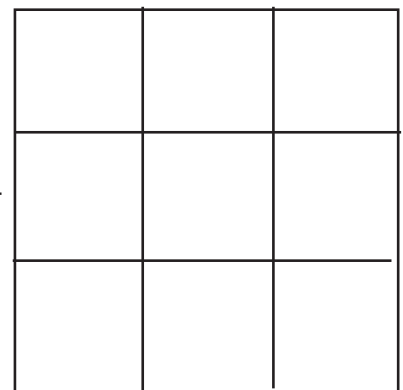
colora $\frac{10}{16}$

colora $\frac{4}{6}$



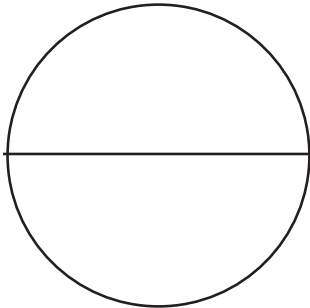
colora $\frac{8}{10}$

colora $\frac{4}{9}$

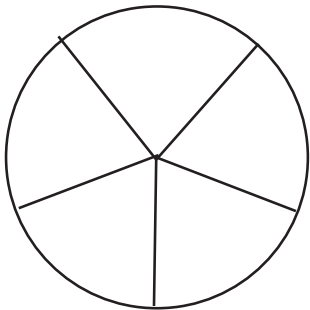


ANCORA FRAZIONI

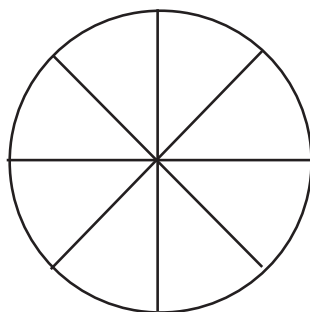
Colora nelle figure geometriche la parte corrispondente alla frazione indicata.



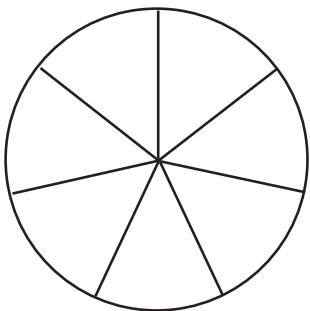
colora $\frac{1}{2}$



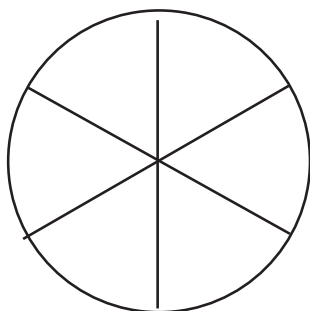
colora $\frac{2}{5}$



colora $\frac{3}{8}$

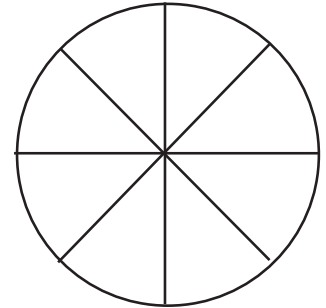


colora $\frac{3}{7}$

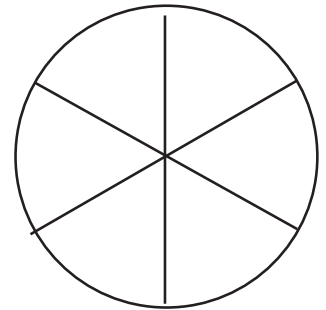


colora $\frac{1}{6}$

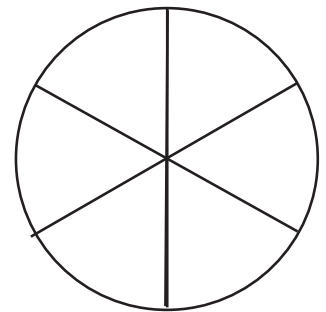
colora $\frac{4}{8}$



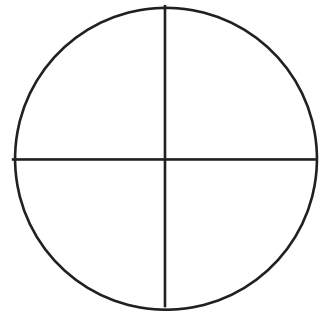
colora $\frac{5}{6}$



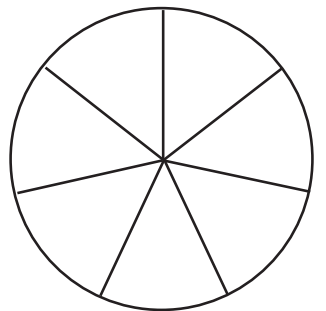
colora $\frac{2}{6}$



colora $\frac{1}{4}$

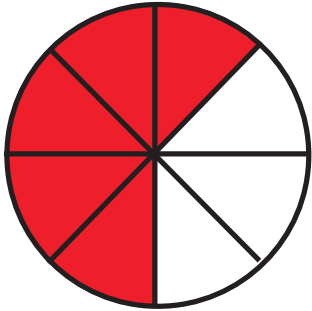


colora $\frac{6}{7}$

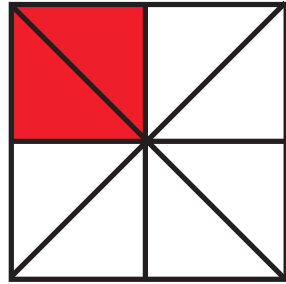


ANCORA FRAZIONI


Scrivi la frazione corrispondente alla parte colorata nelle figure geometriche.



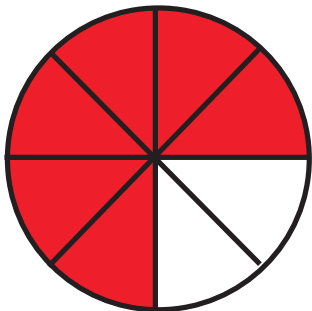
=====
=====



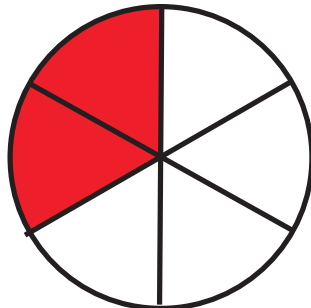
=====
=====



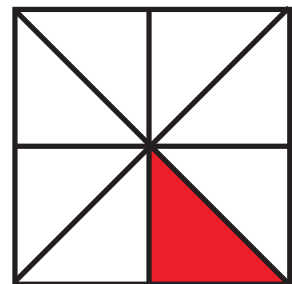
=====
=====




=====
=====




=====
=====



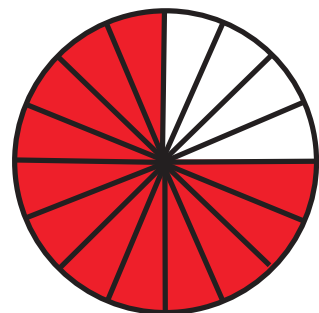
=====
=====



=====
=====




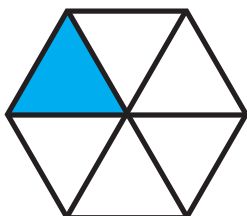
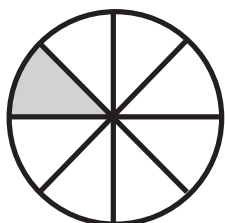


=====
=====



=====
=====

ANCORA FRAZIONI

Collega ogni figura con la frazione rappresentata dalla parte colorata.



$$\frac{1}{8}$$

$$\frac{2}{6}$$

$$\frac{1}{4}$$

$$\frac{1}{2}$$


$$\frac{3}{4}$$

$$\frac{1}{6}$$

$$\frac{3}{8}$$


ANCORA FRAZIONI

Osserva le due figure



$$\frac{1}{2}$$

$$\frac{2}{4}$$





Nelle due figure la parte colorata corrisponde a metà quadrato. Posso dire che le due **FRAZIONI** sono **EQUIVALENTI** e scrivere.

$$\frac{1}{2} = \frac{2}{4}$$

Due o più **FRAZIONI** sono **EQUIVALENTI** se rappresentano la stessa quantità.

Osserva le due figure e completa.









=

ANCORA FRAZIONI


Osserva le parti colorate e completa.





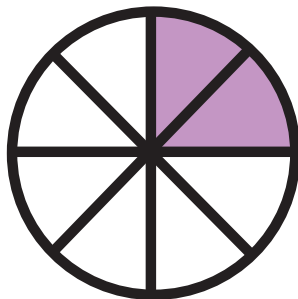
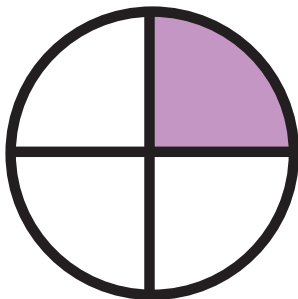
$$\frac{1}{2} = \frac{2}{4}$$

$$\frac{3}{6} = \frac{\quad}{8}$$

Queste **FRAZIONI** sono **EQUIVALENTI**.





$$\frac{2}{3} = \frac{4}{6} = \frac{6}{9}$$



$$\frac{1}{4} = \frac{2}{8}$$


$$\frac{2}{5} = \frac{4}{10}$$

ANCORA FRAZIONI


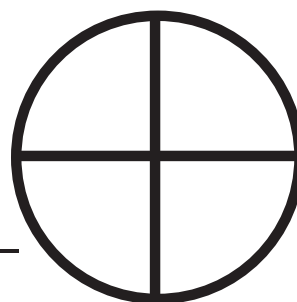


$$\frac{1}{4} = \frac{2}{8}$$



Come nell'esempio colora nel modo opportuno




$$\frac{6}{8} = \frac{3}{4}$$



$$\frac{1}{3} = \frac{2}{6}$$




$$\frac{1}{2} = \frac{4}{8}$$




ANCORA FRAZIONI


Prima colora la parte equivalente, poi scrivi le frazioni.




=



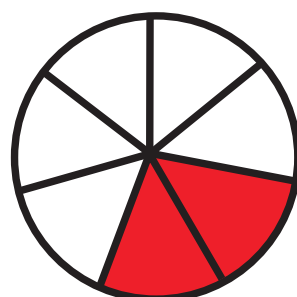
=




=



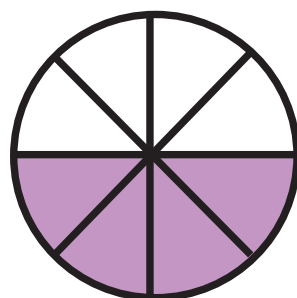
=



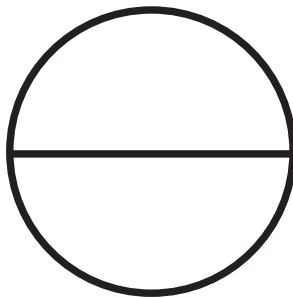
=



=




=



=



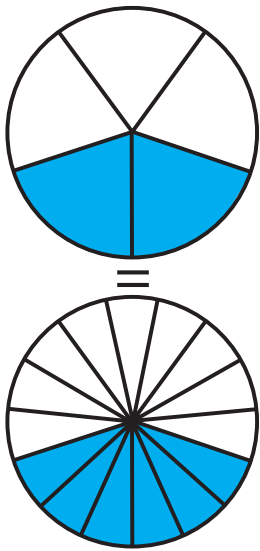
=



=

ANCORA FRAZIONI

Completa come nell'esempio.



$$\frac{2}{5} = \frac{6}{15}$$

