
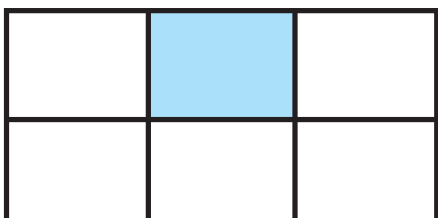





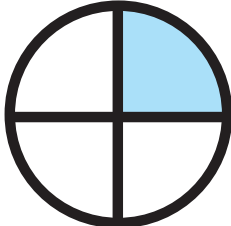

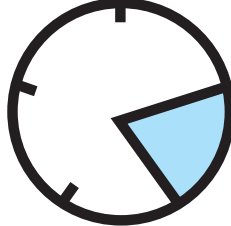
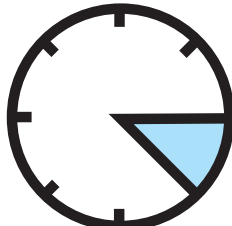




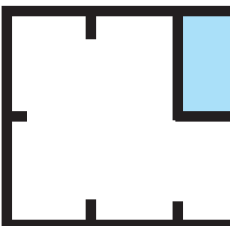
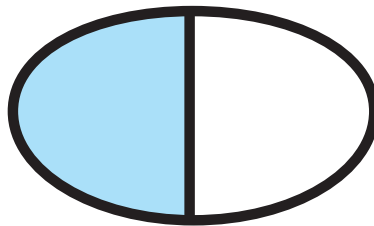
ANCORA FRAZIONI

Chiamiamo *unità frazionaria* una *frazione propria* che ha come *numeratore* il numero 1.

Osserva e completa:

$\frac{1}{2}$		un mezzo	
			
			

				
$\frac{1}{2}$	$\frac{1}{4}$	$\frac{1}{3}$	—	—



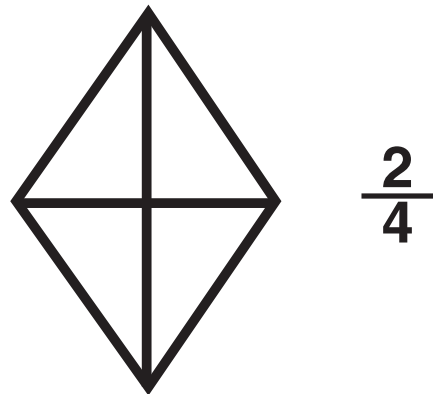
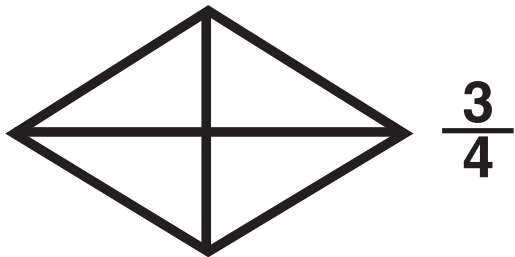
			
—	—	—	—

ANCORA FRAZIONI

Le frazioni possono essere *proprie* o *improprie*, come abbiamo già visto in precedenza.


Ecco alcuni esempi di frazioni proprie: *una frazione è propria*, quando il suo valore è *minore dell'unità 1*.

Colora come indicato dalle *frazioni proprie*:




ANCORA FRAZIONI


Chiamiamo *frazione impropria* ogni frazione che ha il *numeratore maggiore o uguale* al denominatore. Osserva l'esempio e completa:



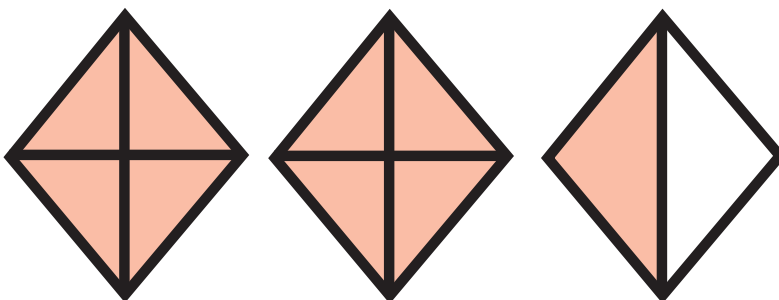
$$\frac{10}{3}$$




$$-$$



$$-$$



$$-$$




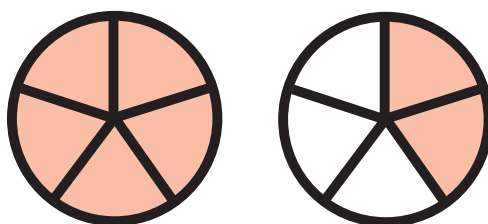
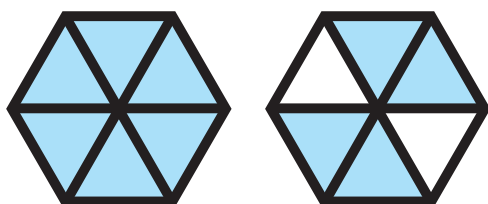
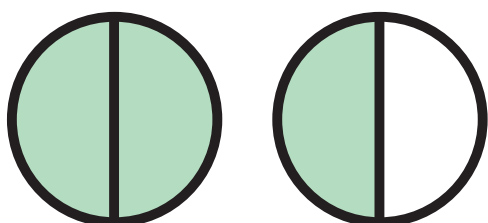

$$-$$

ANCORA FRAZIONI

Completa come nella scheda precedente:

FIGURE

FRAZIONI
IMPROPRIE



ANCORA FRAZIONI

Completa dopo avere osservato l'esempio:

$\frac{8}{3}$		$3 + \frac{1}{2}$
$\frac{7}{5}$		$2 + \frac{2}{3}$
$\frac{9}{8}$		$1 + \frac{1}{8}$
$\frac{7}{2}$		3
$\frac{12}{4}$		$1 + \frac{2}{3}$
$\frac{5}{3}$		$1 + \frac{2}{5}$
$\frac{10}{5}$		2
$\frac{11}{6}$		$1 + \frac{5}{6}$
$\frac{17}{8}$		$2 + \frac{1}{2}$
$\frac{5}{2}$		$2 + \frac{1}{8}$

ANCORA FRAZIONI

Completa dopo avere osservato l'esempio:

$$\frac{1}{3} \quad \frac{1}{3} \quad \frac{1}{3} \quad \frac{1}{3} = \bigcirc + \frac{1}{3}$$

$$\frac{1}{8} \quad \frac{1}{8} \quad \frac{1}{8} \quad \frac{1}{8} \quad \frac{1}{8} = \bigcirc + \dots$$

$$\frac{1}{2} \quad \frac{1}{2} \quad \frac{1}{2} \quad \frac{1}{2} = \bigcirc + \dots$$

$$\frac{1}{6} \quad \frac{1}{6} \quad \frac{1}{6} \quad \frac{1}{6} \quad \frac{1}{6} \quad \frac{1}{6} = \bigcirc + \dots$$

$$\frac{1}{8} \quad \frac{1}{8} \quad \frac{1}{8} = \bigcirc + \dots$$